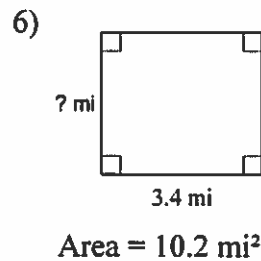
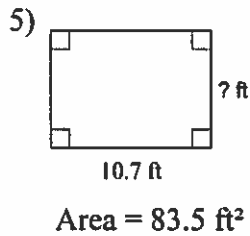
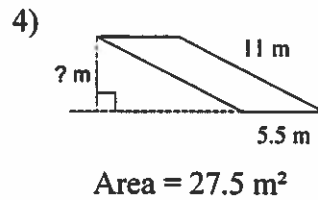
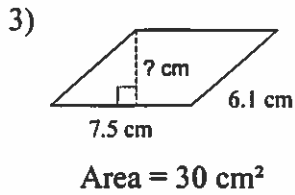
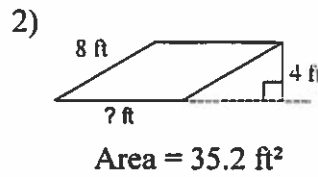
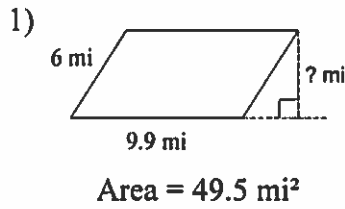
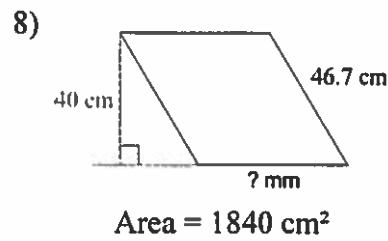
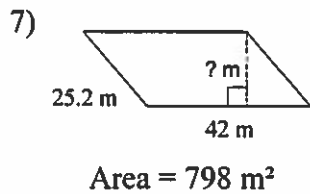


Perimeter and Area

Find the missing measurement and the perimeter. Round your answer to the nearest tenth.



Find the missing measurement. Round your answer to the nearest tenth. Take care to use the correct units.



Find the lateral area and surface area of each figure. Round your answers to the nearest hundredth, if necessary.

9) A sphere with a diameter of 23.6 m.

10) A sphere with a diameter of 23 mi.