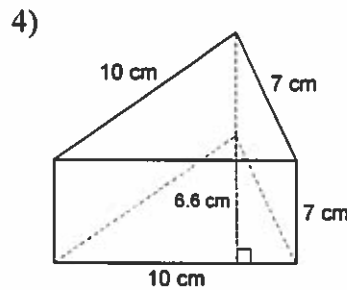
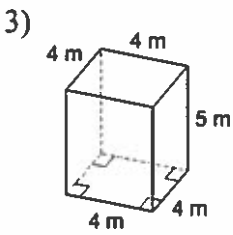
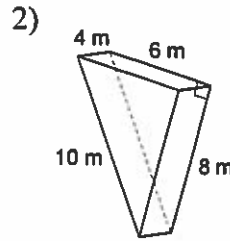
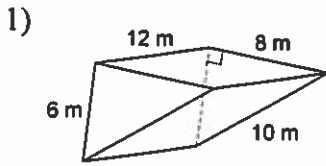


Lateral and Surface Areas

Find the lateral area and surface area of each figure. Round your answers to the nearest hundredth, if necessary.



Find the lateral area of each figure. Round your answers to the nearest hundredth, if necessary.

